

Name _____

Date _____

MUZIE PRACTICE LOG

List 4 Goals

List 3 things you want to learn next week!

What are some things you struggle with?

Log Practice Time

Mon _____

Tue _____

Wed _____

Thurs _____

Fri _____

Sat _____

Sun _____

Rate Your progress for this week!



Name _____

Date _____

MUZIE WORD SEARCH

Find and circle the words listed below!

| | | | | | | | | |
|---|---|---|---|---|---|---|---|---|
| S | U | N | W | A | N | P | U | B |
| C | H | O | R | D | I | P | L | A |
| A | H | T | T | W | C | L | E | S |
| L | E | N | E | U | E | A | A | S |
| E | L | W | R | R | D | Y | N | N |
| S | T | A | F | F | T | S | D | F |
| C | A | M | U | S | I | C | H | U |
| K | U | T | R | E | B | L | E | N |
| P | I | G | E | A | D | P | L | E |

Music

Staff

Fun

Scales

Chord

Treble

Play

Clef

Bass

Name _____

Date _____



MY FAVORITE MUSIC

Write down your ten favorite songs!

1 **SONG TITLE** _____
ARTIST _____
BEST PART _____

2 **SONG TITLE** _____
ARTIST _____
BEST PART _____

3 **SONG TITLE** _____
ARTIST _____
BEST PART _____

4 **SONG TITLE** _____
ARTIST _____
BEST PART _____

5 **SONG TITLE** _____
ARTIST _____
BEST PART _____

6 **SONG TITLE** _____
ARTIST _____
BEST PART _____

7 **SONG TITLE** _____
ARTIST _____
BEST PART _____

8 **SONG TITLE** _____
ARTIST _____
BEST PART _____

9 **SONG TITLE** _____
ARTIST _____
BEST PART _____

10 **SONG TITLE** _____
ARTIST _____
BEST PART _____



Name _____

Date _____



RHYTHM MATH

Add the note values together and draw the correct note in the bubble!

Name _____

Date _____



FIND THE MISSING NOTE

Write the missing note in the open space!



$$\text{Quarter Note} + \underline{\hspace{2cm}} = \text{Half Note}$$

$$\text{Half Note} + \underline{\hspace{2cm}} = \text{Whole Note}$$

$$\text{Half Note} - \underline{\hspace{2cm}} = \text{Quarter Note}$$

$$\text{Quarter Note} + \underline{\hspace{2cm}} = \text{Half Note}$$

$$\text{Whole Note} - \underline{\hspace{2cm}} = \text{Quarter Note}$$

$$\text{Quarter Note} + \underline{\hspace{2cm}} = \text{Dotted Quarter Note}$$

$$\text{Quarter Note} - \underline{\hspace{2cm}} = \text{Eighth Note}$$

$$\text{Dotted Quarter Note} + \underline{\hspace{2cm}} = \text{Half Note}$$

$$\text{Quarter Note} - \underline{\hspace{2cm}} = \text{Eighth Note}$$

$$\text{Half Note} + \underline{\hspace{2cm}} = \text{Dotted Half Note}$$

$$\text{Dotted Quarter Note} + \underline{\hspace{2cm}} = \text{Half Note}$$


Name _____

Date _____



DRAWING WHOLE NOTES

Trace the notes below and practice drawing on your own
between the examples.



Handwriting practice area consisting of four sets of five horizontal lines. The first two sets each have a small dotted circle on the second line from the bottom, serving as a starting point for drawing a whole note. The last two sets are blank for independent practice.


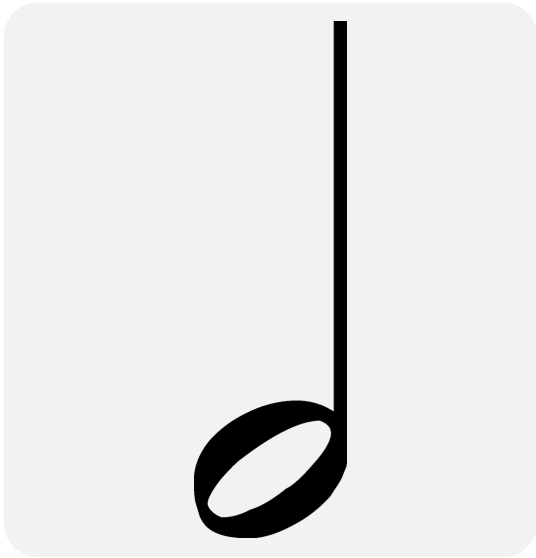
Name _____

Date _____



DRAWING HALF NOTES

Trace the notes below and practice drawing on your own between the examples.



Handwriting practice area consisting of four sets of five-line musical staves. Each set contains two dotted half notes for tracing. The first two staves have four notes each, and the last two staves have two notes each. The notes are positioned on the second line from the bottom of each staff.

Name _____

Date _____



DRAWING QUARTER NOTES

Trace the notes below and practice drawing on your own
between the examples.



Handwriting practice area with four musical staves. Each staff contains two quarter notes for tracing. The first two staves show a dashed note head and a solid note head, each with a dashed stem. The last two staves show a solid note head with a dashed stem.


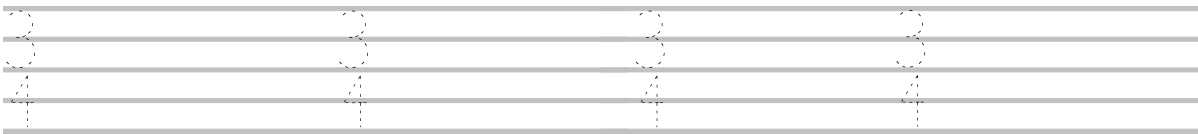
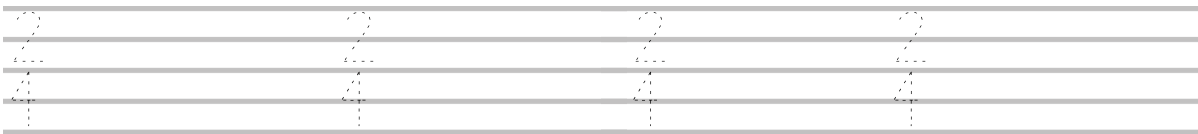
Name _____

Date _____



DRAWING TIME SIGNATURES

Trace the time signatures below and practice drawing on your own between the examples.




Name _____

Date _____




THE MISSING LETTER

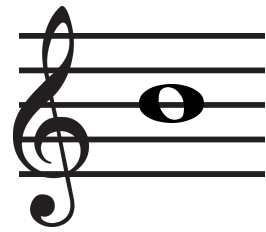
Look at the notes below, identify the note, and add the missing letter on the blank.



g _ m




b _ g




_ o y



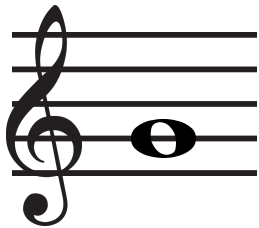
_ a t




_ o g




_ u n



b i _



m u _



_ a n